

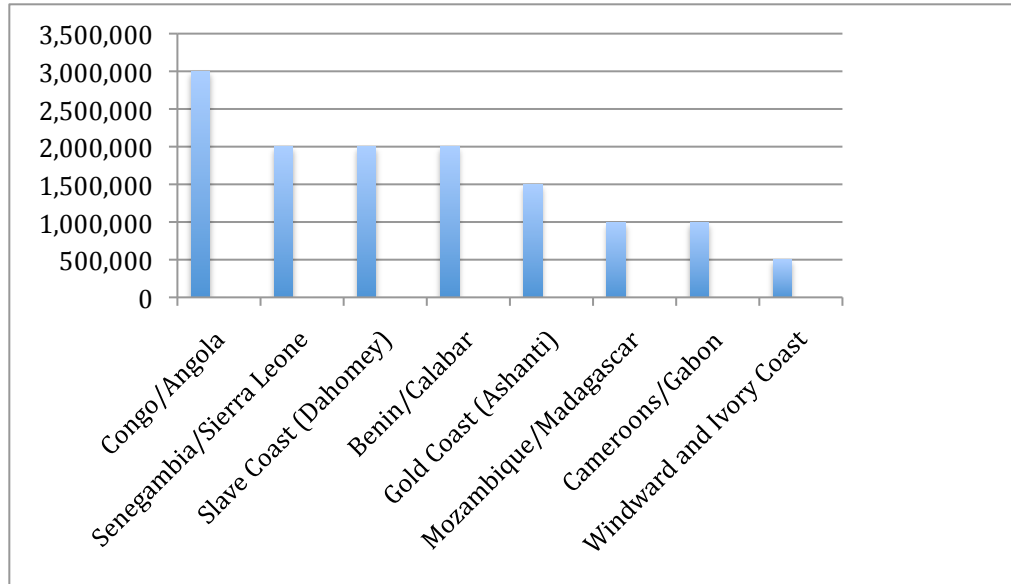
### Activity 5. Trans-Atlantic Slave Trade

**Source:** Thomas, H. (1997). *The Slave Trade*. New York: Simon & Schuster, 804-805.

**Instruction:** Graphs A – D document the extent of the trans-Atlantic slave trade.

Following each graph is a series of questions and activities. After answering the questions and completing the activities, complete the culminating assignment. As a culminating assignment, use the information from Graphs A – D, your answers to the questions, and the completed activities, to prepare a 500 to 1,000-word essay describing the trans-Atlantic slave trade.

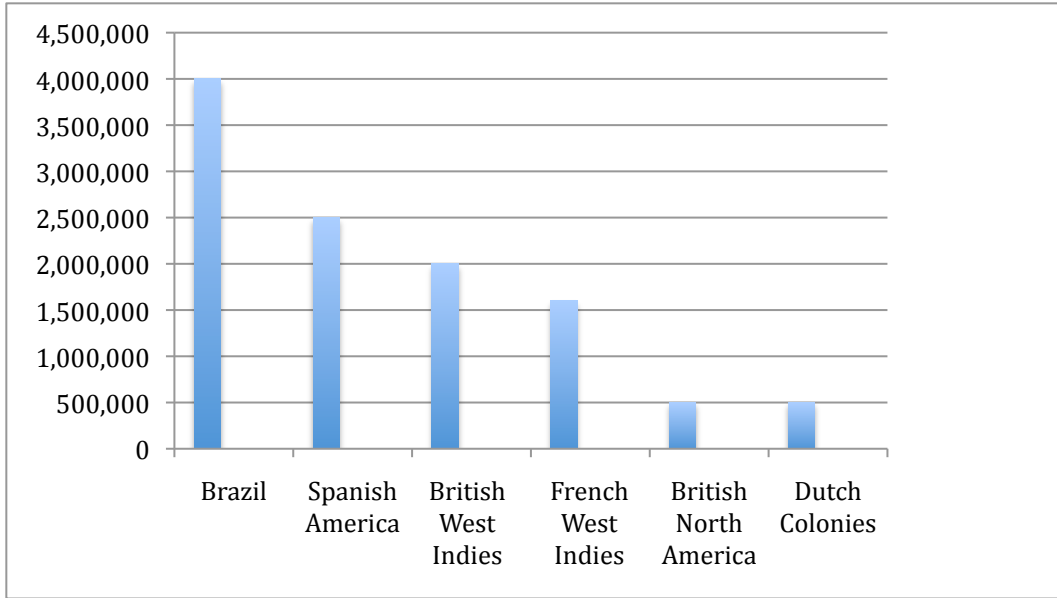
#### A. Point of Origin of Africans Enslaved in the Americas



#### Questions

1. Which region of Africa had the most inhabitants transported to the Americas?
2. Locate each of these regions on a map of Africa. Identify as many contemporary countries as possible in these locations.

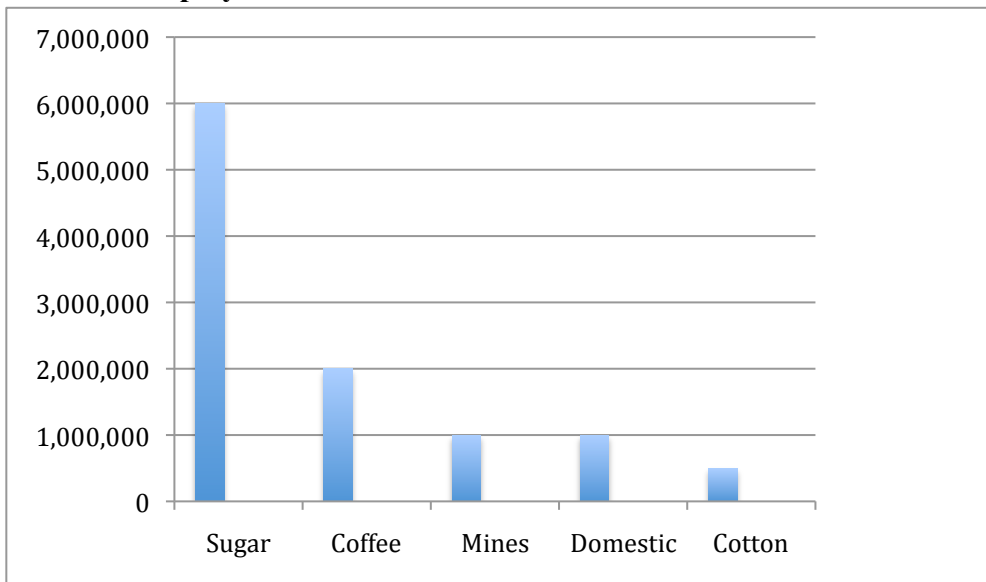
#### B. Point of Arrival of Africans Enslaved in the Americas



### Questions

1. Which location in the Americas was the arrival point for the largest number of enslaved Africans?
2. Use the information from this graph to create a chart.

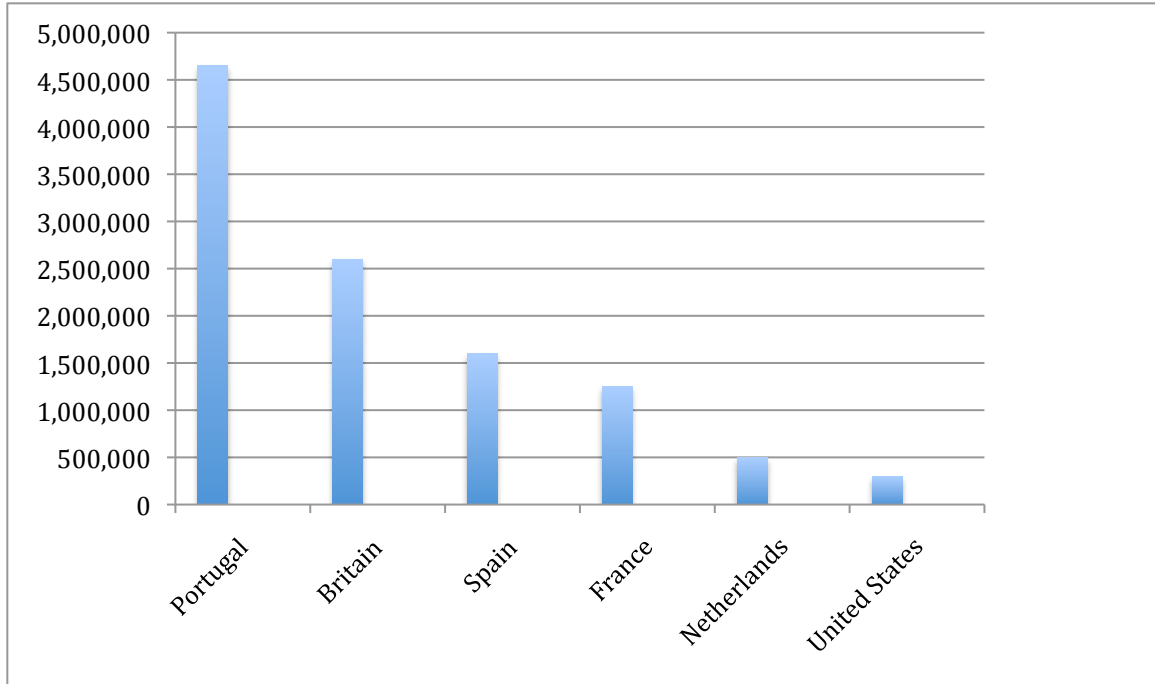
### C. Initial Employment New World Slave Labor



### Questions

1. Which industry provided the initial employment for enslaved Africans in the Americas?
2. How many enslaved Africans were employed in this industry?

### D. European Slave Trading Nations



### Questions

1. Which European nation transported the most enslaved Africans to the Americas?
2. How many enslaved Africans did they bring to the Americas?